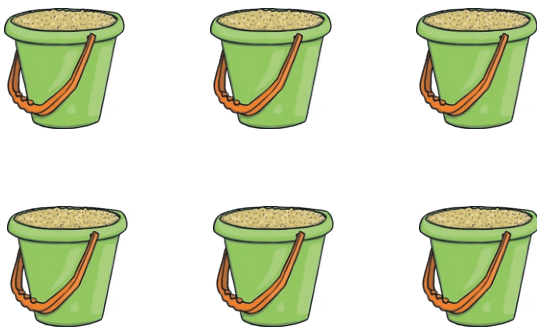


KS1 Maths

Lesson 1

Activity 1

Q1. How many buckets are there?



Q2. True or false? Ring the answer.

| | | | |
|--|------------------|---|--------------|
| | is one more than | 7 | true / false |
| | is one less than | 4 | true / false |
| | is one less than | 5 | true / false |
| | is one more than | 9 | true / false |

Activity 2

Q3. Write the missing phrase.


more than


less than

equal to

- a) 8 is _____ 4
b) 9 is _____ 10
c) 3 is _____ 3


Q4. Write < or > in the rings to make the number sentences correct.

a) 5  3

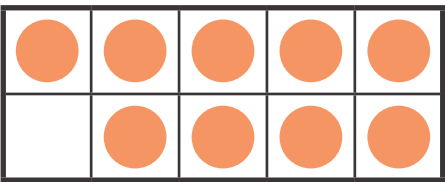
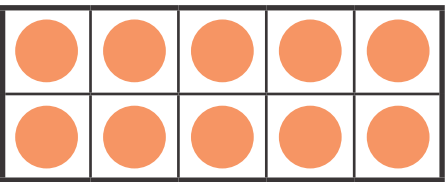
a) 6  7

Activity 3



Q5. How many coins are there?





Q6. Draw lines to match the ten-frames with the numbers.



| tens | ones |
|------|------|
| 1 | 2 |



| tens | ones |
|------|------|
| 1 | 7 |

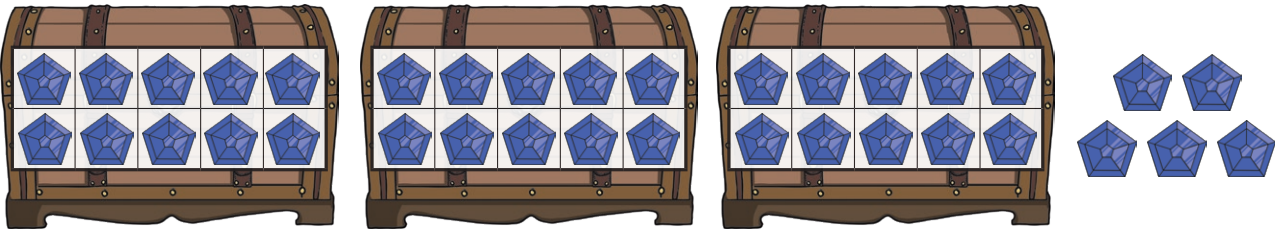


| tens | ones |
|------|------|
| 1 | 9 |


Activity 4

Q7.

a) How many jewels are there?



b) How many jewels are there?



Q8. How many jewels are there altogether?

Activity 5

Q9.

a) Put these numbers in order, from the least value to the greatest.



b) Put these numbers in order, from the greatest value to the least.



Q10. Write $<$ $>$ or $=$ in the circles to make the number sentences correct.

