



Perfect symmetry

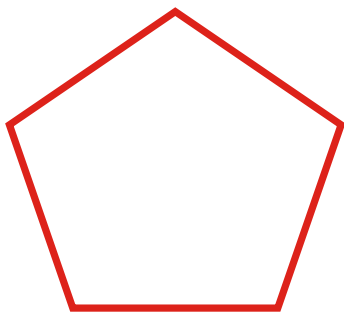
Symmetry was an important feature of Ancient Greek architecture. How many lines of symmetry can you find in these shapes?




I have lines of symmetry



I have lines of symmetry



I have lines of symmetry



I have lines of symmetry

Can you find any lines of symmetry in this shape?

