

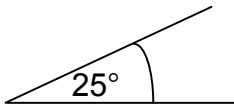
Identifying angles - answers

State which of the angles in the drawings are:

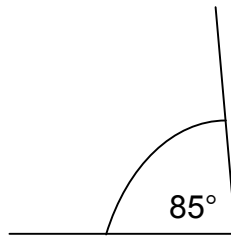
- right angles
- acute angles
- obtuse angles
- reflex angles

Answers are given in the table below.

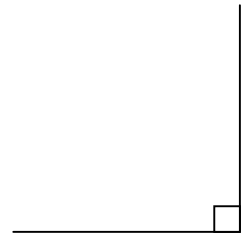
a.



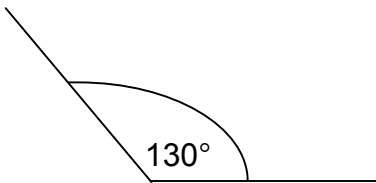
b.



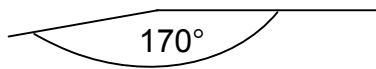
c.



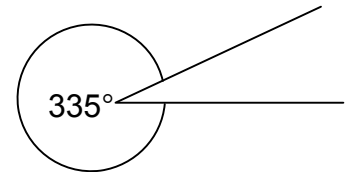
d.



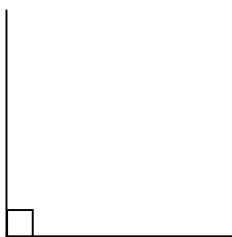
e.



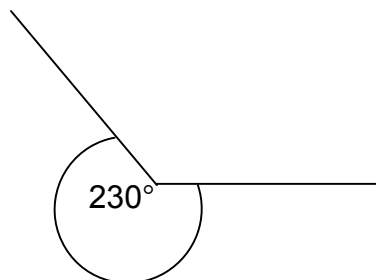
f.



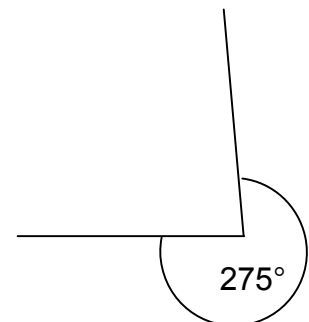
g.



h.



i.



Right angles	Acute angles	Obtuse angles	Reflex angles
c	a	d	f
g	b	e	h
			i