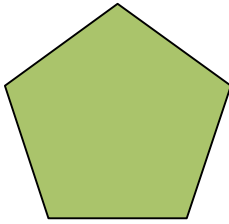


Identifying right angles - answers

The numbers of right angles inside the shapes are given below:

a.




pentagon 0

b.




rectangle 4

c.



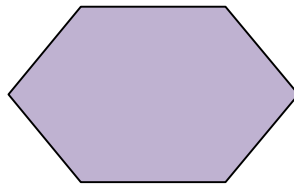
circle 0

d.




triangle 0

e.




hexagon 0

f.



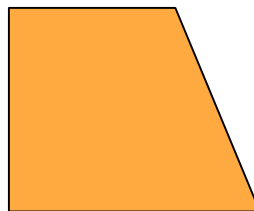
cross 8 (inside the shape)

g.




octagon 0

h.



trapezium 2

i.



curved rectangle 0