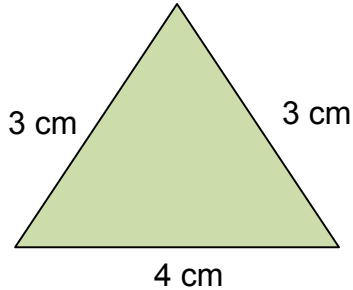


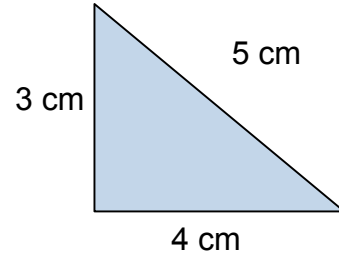


## Finding the perimeter of triangles - answers

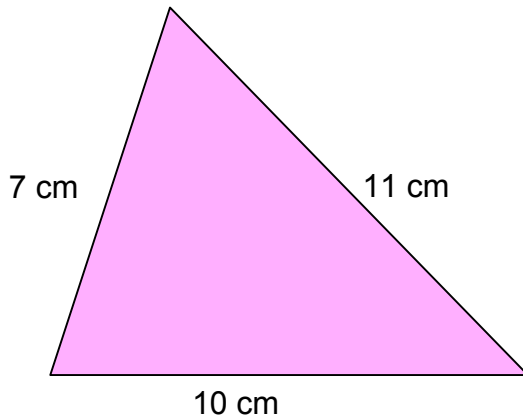
1. Perimeter = 10 cm



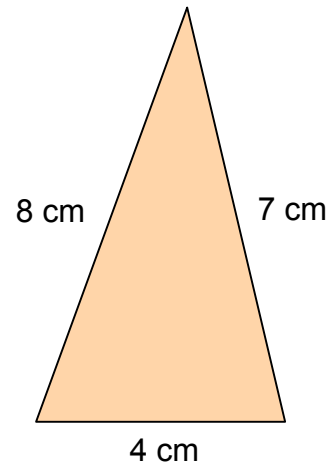
2. Perimeter = 12 cm



3. Perimeter = 28 cm

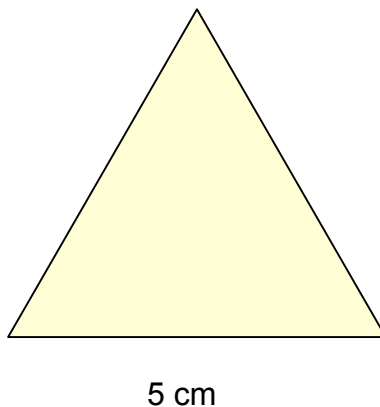


4. Perimeter = 19 cm



5. Measure the lengths of the sides of this triangle and calculate its perimeter.

**Perimeter = 15 cm**



6. Measure the lengths of the sides of this triangle and calculate its perimeter.

**Perimeter = 19 cm**

