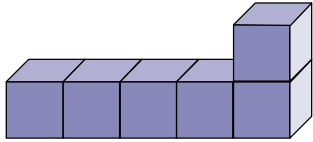


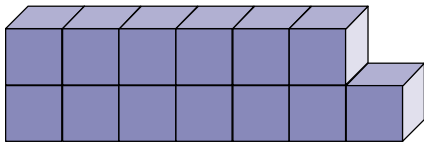


## Finding volume by counting - answers

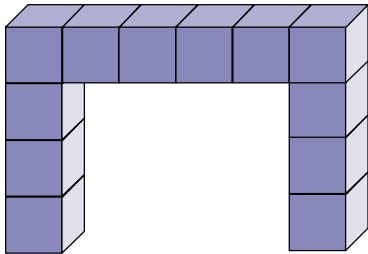
1.

Volume: **6 cm<sup>3</sup>**

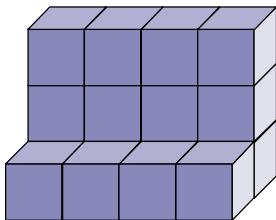
2.

Volume: **13 cm<sup>3</sup>**

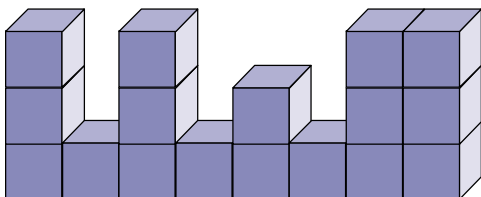
3.

Volume: **12 cm<sup>3</sup>**

4.

Volume: **16 cm<sup>3</sup>**

5.

Volume: **17 cm<sup>3</sup>**