


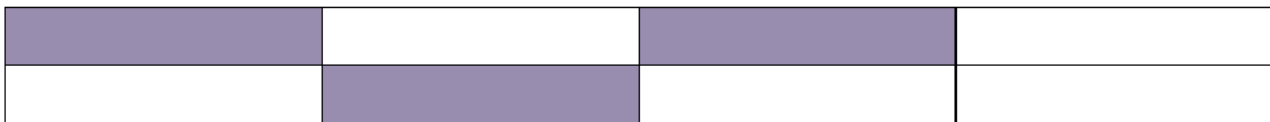
Are these fractions equivalent to half? - answers




Fraction: **5/10**. This is **equal to half**.



Fraction: **3/6**. This is **equal to half**.



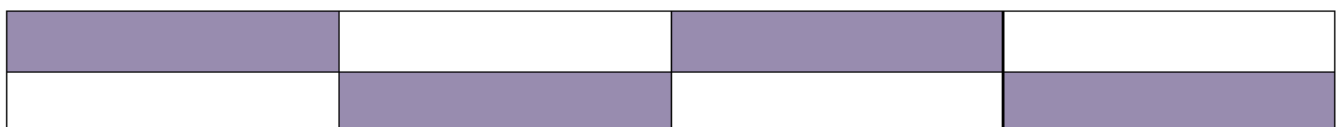
Fraction: **3/8**. This is **less than half**.



Fraction: **4/8**. This is **equal to half**.



Fraction: **6/10**. This is **more than half**.



Fraction: **4/8**. This is **equal to half**.