
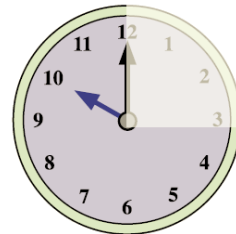


**Finding fractions of time - answers**

1. Shade in half and quarter of an hour on these clocks.  
Your drawing might look different to these, but you needed to show 30 minutes shaded in the first clock and 15 minutes shaded on the second clock.




**half an hour**




**quarter of an hour**


2. Show on the clocks where the minute hand would be for:



**quarter past the hour**

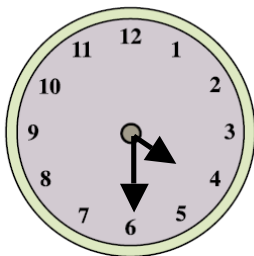


**half past the hour**

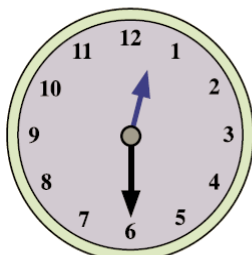


**quarter to the hour**

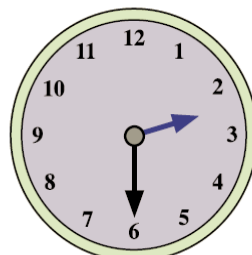
3. Draw on the clocks the hour and minute hands to shows the following times:



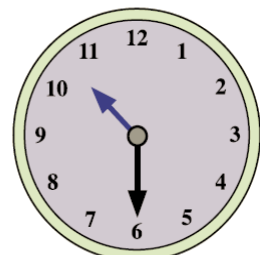
**half past four**



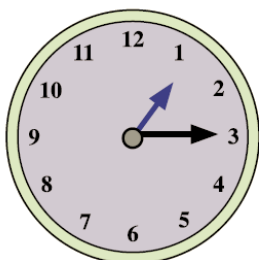
**half past twelve**



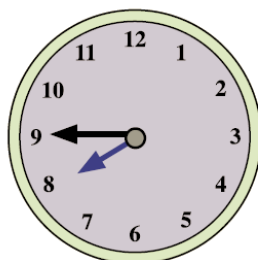
**2.30**




**10.30**



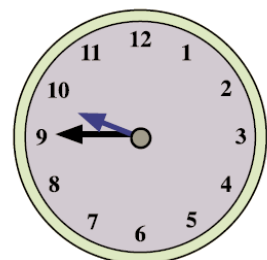
**quarter past one**



**quarter to eight**



**11.15**



**9.45**