


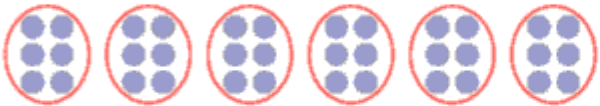






**Division: matching activity - answers**

The cards have been matched correctly below:

 <p>How many fives in twenty?</p>	$20 \div 5$	4
 <p>Seven groups of five</p>	$35 \div 7$	5
 <p>One hundred divided by ten</p>	$100 \div 10$	10
 <p>Six groups of six</p>	$36 \div 6$	6
 <p>How many twos in fourteen?</p>	$14 \div 2$	7
 <p>How many ones in fourteen?</p>	$14 \div 1$	14
 <p>Four groups of eight</p>	$32 \div 4$	8
 <p>Twenty seven divided by three</p>	$27 \div 3$	9