




Using empty number lines - answers


1. $45 - \boxed{17} = 28$



$$\begin{aligned} 28 \text{ to } 30 &= 2 \\ 30 \text{ to } 40 &= 10 \\ 40 \text{ to } 45 &= 5 \end{aligned}$$

$$2 + 10 + 5 = 17$$


2. $90 - \boxed{62} = 28$



$$\begin{aligned} 28 \text{ to } 30 &= 2 \\ 30 \text{ to } 90 &= 60 \end{aligned}$$

$$2 + 60 = 62$$

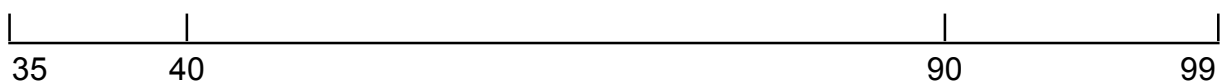
3. $60 - \boxed{33} = 27$



$$\begin{aligned} 27 \text{ to } 30 &= 3 \\ 30 \text{ to } 60 &= 30 \end{aligned}$$

$$3 + 30 = 33$$

4) $99 - \boxed{64} = 35$



$$\begin{aligned} 35 \text{ to } 40 &= 5 \\ 40 \text{ to } 90 &= 50 \\ 90 \text{ to } 99 &= 9 \end{aligned}$$

$$5 + 50 + 9 = 64$$