









Rounding measurements - answers

Did you round the different measurements correctly?

Item	Measurement	Rounding the measurement
	A coffee table Length: 66 cm	How long is the coffee table, to the nearest 10 cm? <u>70 cm</u>
	An envelope Width: 175 mm	How wide is the envelope to the nearest 10 mm? <u>180 mm</u>
	Digital clock Time: 10:20 am	What is the time to the nearest hour? <u>10:00</u>
	Analogue clock Time: 5:25 pm	What is the time, to the nearest quarter of an hour? <u>5:30 pm or half past 5</u>
	Car speedometer Speed: 55 mph	What is the speed, to the nearest 10 mph? <u>60 mph</u>
	Bathroom scales Weight: 58 kg	What is this weight, to the nearest 10 kg? <u>60 kg</u>
	Thermometer Temperature: 33°C	What is the temperature, to the nearest 10 degrees? <u>30°C</u>
	Jug Liquid: 280 ml	How much does this jug contain, to the nearest 100 ml? <u>300 ml</u>