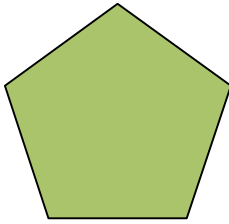




## Identifying right angles

Have a go at working out the **number of right angles** inside the following shapes. If the shape has no right angles, write '0'.

a.




pentagon

b.




rectangle

c.



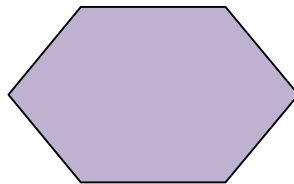
circle

d.




triangle

e.




hexagon

f.



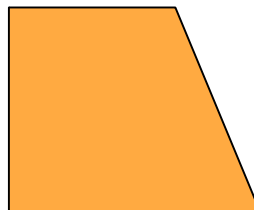
cross

g.



octagon

h.



trapezium

i.



curved rectangle