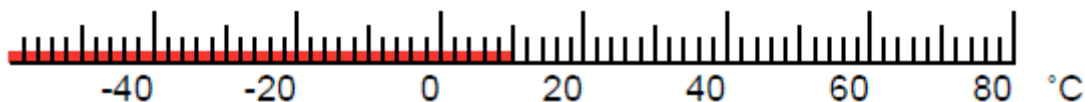


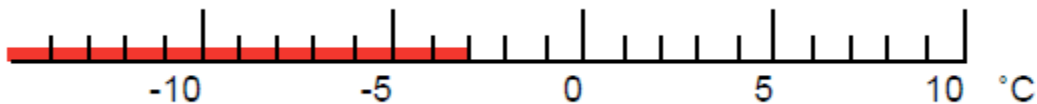
Reading thermometers with unmarked divisions

Read the thermometers to answer these questions.

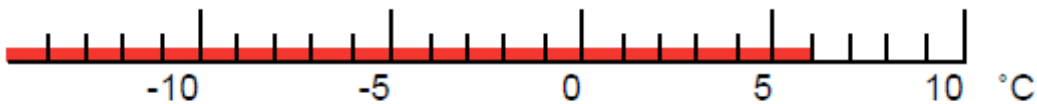
1. This reading should be given as: a. 10°C , b. 5°C , or c. 2°C ?



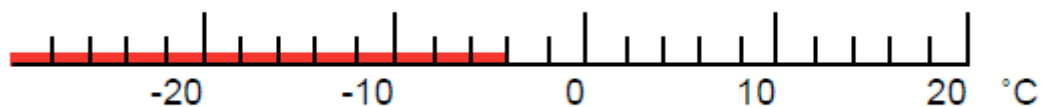
2. The temperature of this thermometer is -7°C . True or False?



3. This reading should be given as: a. 6°C or b. 7°C ?



4. This reading should be given as: a. -4°C or b. -2°C ?



Now check your answers with the answer sheet.