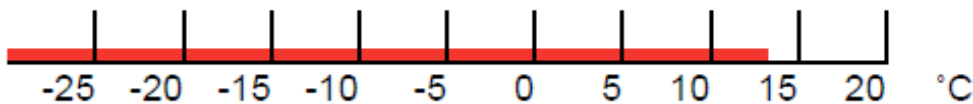


Reading thermometers with marked divisions

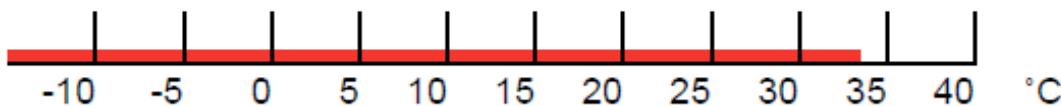
Give your answers to the **nearest marked division**.

1. Caz had to read this thermometer to the nearest marked division. Her answer was 20°C . Was this correct?



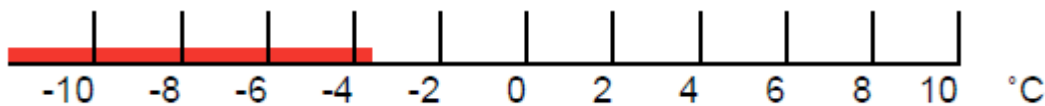
2. To the nearest marked division, is the reading on this thermometer:

a. 35°C b. 30°C or c. -30°C ?

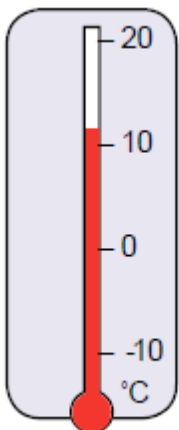


3. Again to the nearest marked division, is the reading on this thermometer:

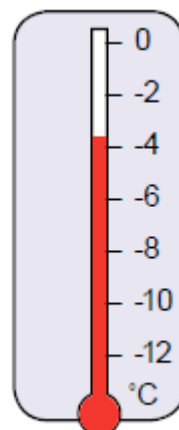
a. 2°C b. -2°C or c. -4°C ?



4. Write down this temperature reading correct to the nearest division:



5. What temperature does this thermometer show correct to the nearest division:



Now check your answers with the answer sheet.