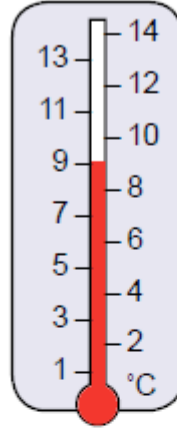


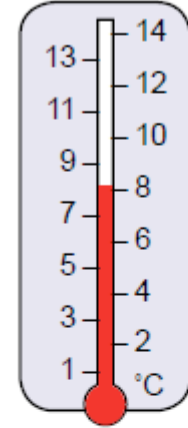
Introduction to temperature

1. Which of these two thermometers is showing a temperature of 8°C?

A.

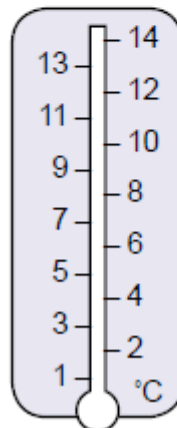


B.

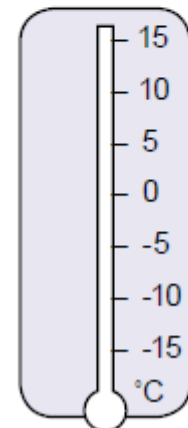


2. The weather forecast for Scotland was a temperature of 2°C. Show this reading on diagram C.

C.

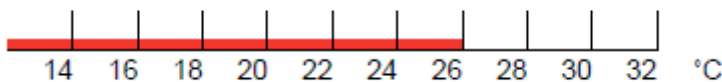


D.

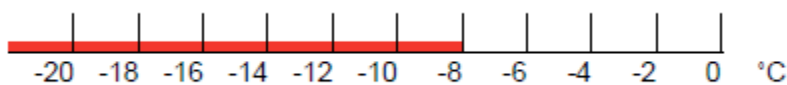


3. The temperature outside Sven's house was -10°C. Show this reading on diagram D.

4. Sue bought a houseplant. The label said 'Prefers a temperature below 20°C'. Is this thermometer showing a suitable temperature?



5. Jim's packet of frozen food reads 'store below -12°C'. Is this thermometer showing a suitable temperature?



Now check your answers with the answer sheet.