

### Choosing litres or millilitres







For this activity you'll need to find three containers:

- an egg cup
- a mug
- a saucepan

Fill each container with water and then transfer the water into a measuring jug. Complete this table, ticking the box to say whether you measured the liquid in **litres** or **millilitres**. Then write down the actual measurement.

	Container		
	Egg cup	Mug	Saucepan
Litres			
Millilitres			
Measurement			

Which unit of capacity (litres or millilitres) would you use to measure the liquid in these containers? The first one's been done for you.

 <b>A bath</b>	<p>litres</p>	 <b>A bottle of perfume</b>	
 <b>A can of drink</b>		 <b>A jug</b>	
 <b>A can of soup</b>		 <b>A watering can</b>	