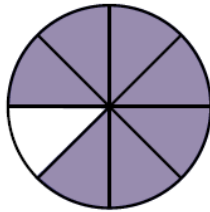


Matching up diagrams and fractions

Draw lines to connect each fraction with the correct diagram.

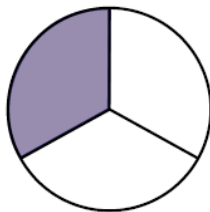
$1/3$



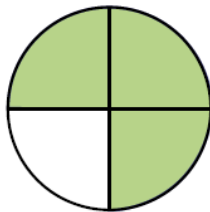
$3/4$



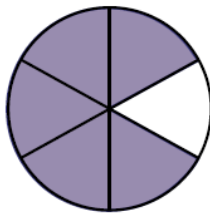
$7/8$



$1/10$



$1/5$



$5/6$

