



Are these fractions equivalent to half?

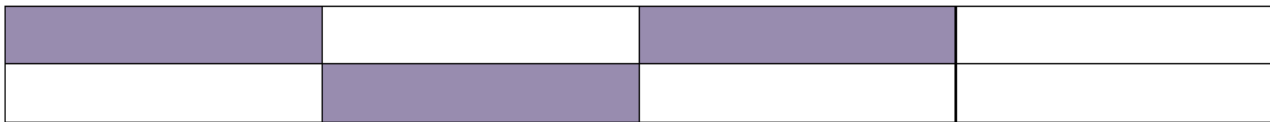
Work out the fractions below and underline the correct answer.




Fraction: _____ Is this: less than half, equal to half or more than half?



Fraction: _____ Is this: less than half, equal to half or more than half?



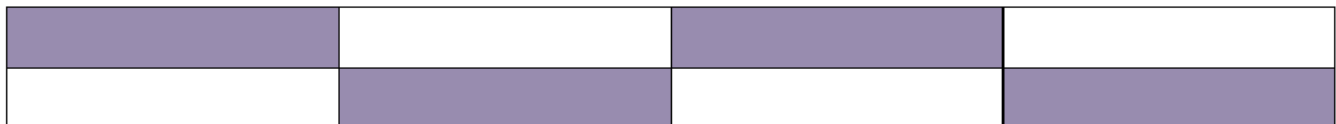
Fraction: _____ Is this: less than half, equal to half or more than half?



Fraction: _____ Is this: less than half, equal to half or more than half?



Fraction: _____ Is this: less than half, equal to half or more than half?



Fraction: _____ Is this: less than half, equal to half or more than half?