



Matching fractions

Match the image with the number that is half its value. Do the same on page 2, but with quarters.






£14

Find a number that is $\frac{1}{2}$ of this.

5






£30


Find a number that is $\frac{1}{2}$ of this.

4




Find a number that is $\frac{1}{2}$ of this.

15



Find a number that is $\frac{1}{2}$ of this.

12




Find a number that is $\frac{1}{2}$ of this.

7




Match the image with the number that is a quarter of its value. Do this in the same way as on page 1.




Find a number that is $\frac{1}{4}$ of this.

6




Find a number that is $\frac{1}{4}$ of this.

2




Find a number that is $\frac{1}{4}$ of this.

3



Find a number that is $\frac{1}{4}$ of this.

5



Find a number that is $\frac{1}{4}$ of this.

10