







# Matching multiplication

Match the images with an addition sum, a multiplication sum, blocks and a total number from page 2.





Match an addition sum, a multiplication sum, blocks and a total number with an image from page 1.

$3 + 3 + 3 + 3 + 3$	$2 + 2 + 2 + 2$ $+ 2 + 2 + 2 + 2$
$6 + 6 + 6$	$4 + 4 + 4 + 4 + 4 + 4$
$6 \times 4$	$3 \times 6$
$5 \times 3$	$8 \times 2$
16	24
18	15
