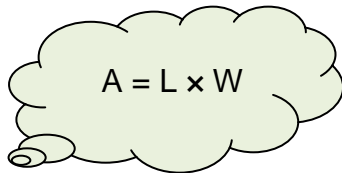
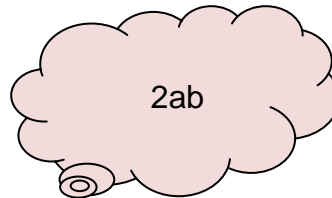
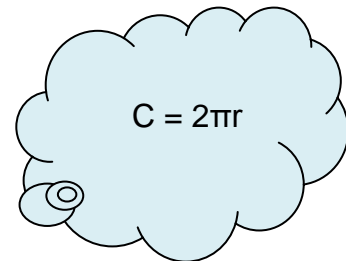



Identifying formulas

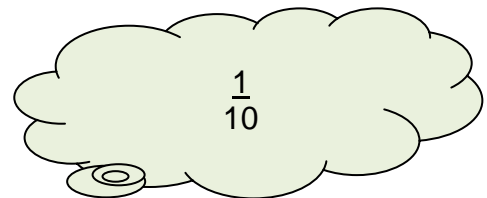
Some of these are formulas and some are not. **Put a tick beside the formulas.**

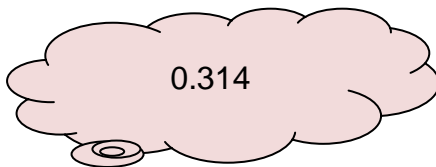

$$A = L \times W$$



$$2ab$$

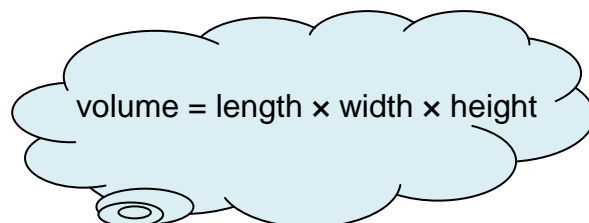

$$C = 2\pi r$$

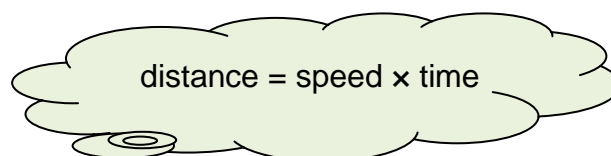

$$D + 2S$$


$$\frac{1}{10}$$


$$0.314$$


$$25\%$$


$$\text{volume} = \text{length} \times \text{width} \times \text{height}$$


$$\text{distance} = \text{speed} \times \text{time}$$