


Party

KS1 Maths



Activity 1

Q1: How many balloons are there?



Count in twos to find the total.

Q2: Count in twos to fill in the missing numbers.



Activity 2

Q3: Rhys counted the apples in fives.

Find the odd one out and write the correct number.



5



15



30



10



20



Is there a pattern that helped you?



Q4: There are 5 cakes in each box.



How many cakes are there altogether?

Activity 3

Q5: True or false?



There are 90 balls in total.



True

False

Q6: Colour a path on the dance floor to show steps of ten from 10 to 100.



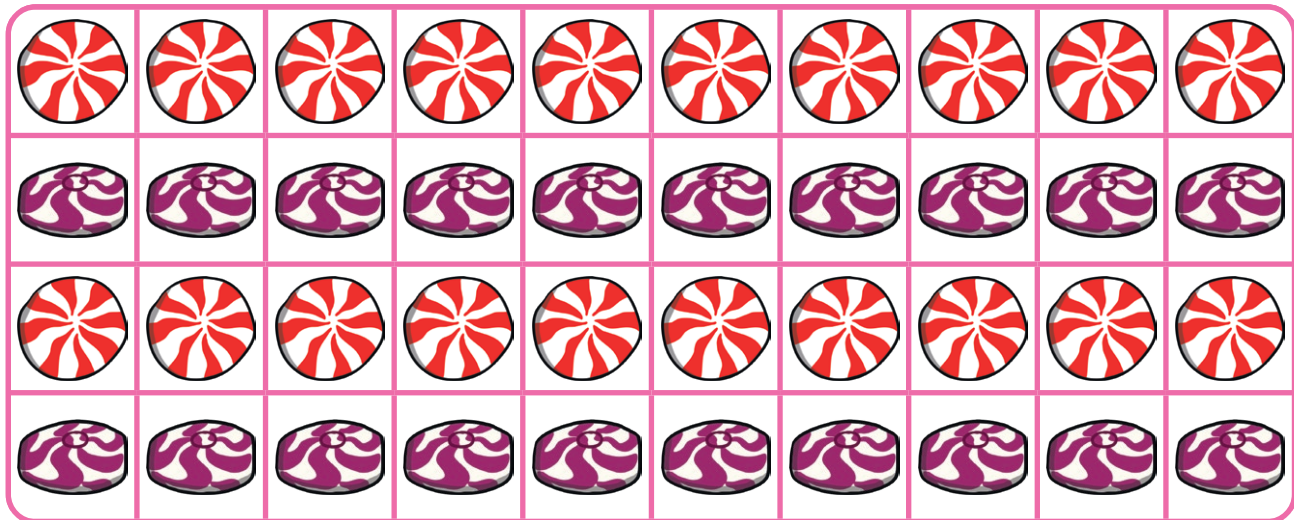
10	20	25	100
5	30	35	90
15	40	45	80
55	50	60	70



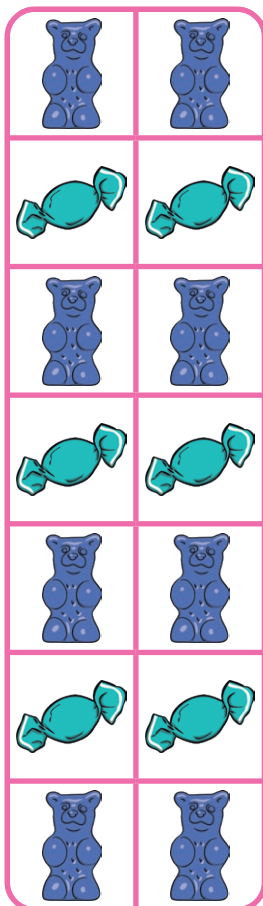
Activity 4

Q7: The sweets have been arranged in arrays. Count in steps of 2, 5 or 10 to find the totals.

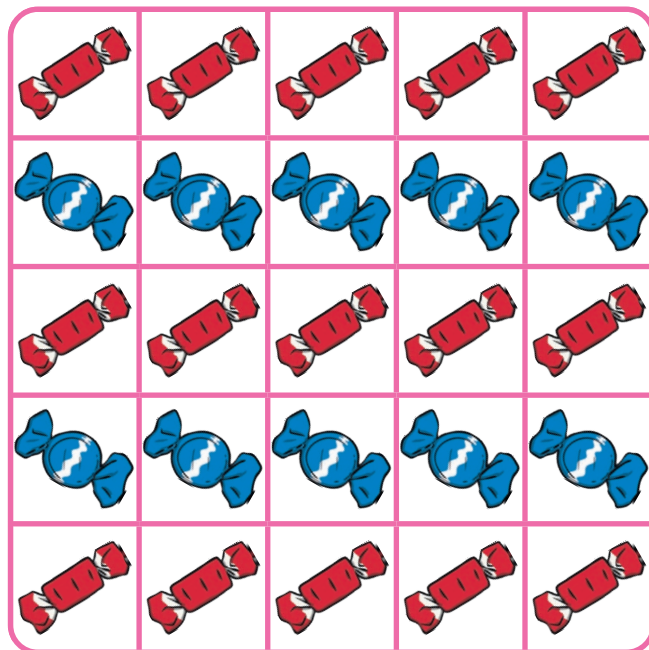
a.



b.



c.

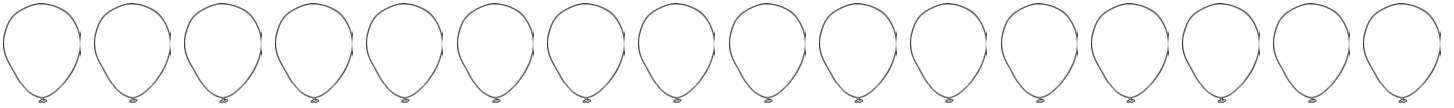


Party

KS1 Maths Answers


Activity 1

Q1: How many balloons are there? Count in twos to find the total.



16

Q2: Count in twos to fill in the missing numbers.



Activity 2

Q3: Rhys counted the apples in fives.

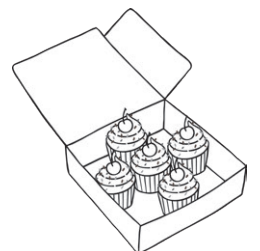
Find the odd one out and write the correct number.

25

Q4: There are 5 cakes in each box.

How many cakes are there altogether?


35



Activity 3

Q5: True or false?

There are 90 balls in total.



True

False

Q6: Colour a path on the dance floor to show steps of ten from 10 to 100.



10	20	25	100
5	30	35	90
15	40	45	80
55	50	60	70



Activity 4

Q7: The sweets have been arranged in arrays. Count in steps of 2, 5 or 10 to find the totals.

- a. 40
- b. 14
- c. 25

